

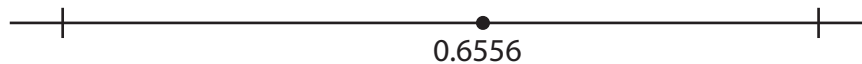
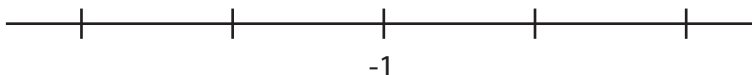
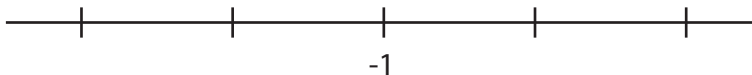
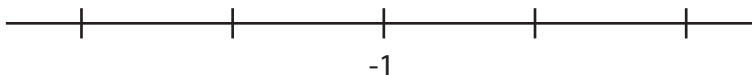


Decimals on Number Lines Homework

1. Label the tick marks with decimal numbers on the following number lines. Is there more than one way to label the number lines? Explain briefly.



2. Label the tick marks on the next three number lines in three different ways. In each case, the distance between adjacent tick marks should be a power of ten, such as 0.1, 0.01, and so on. Say briefly how you determined how to label the number lines.



3. Problems 4 – 7 on pages 14, 15 of the activity manual. No explanation is needed in problem 4. You may either hand in the pages from the workbook or write your answers on separate pages.