
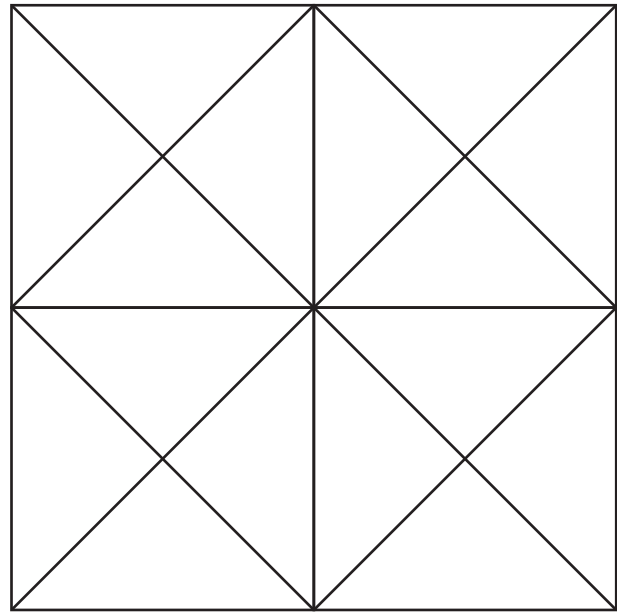


Fractions



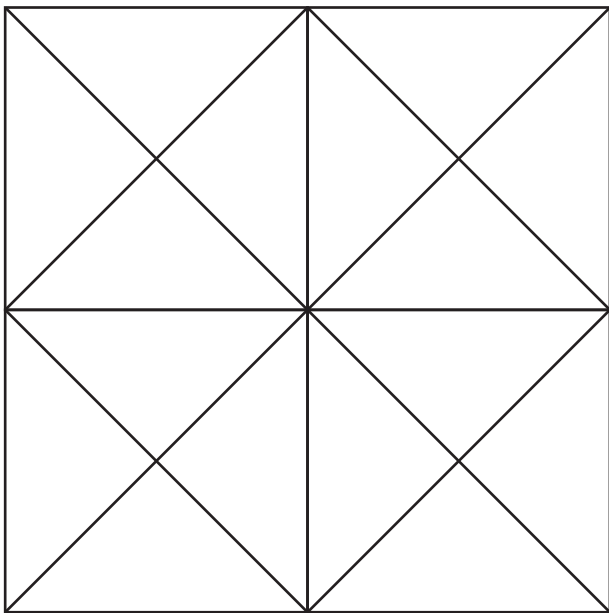
What fraction of the large square above is dark gray? Circle all the correct answers.

- (a)  $\frac{4}{10}$
- (b)  $\frac{4}{16}$
- (c)  $\frac{1}{4}$
- (d)  $\frac{2}{4}$



Color the square above with different colors. For each color you use, write the fraction of the square that that color takes up.

Your fractions:



Pick 4 colors. Color the square to the left so that  $\frac{1}{4}$  is one color,  $\frac{3}{8}$  is a second color,  $\frac{3}{16}$  is a third color, and the rest is the fourth color. What fraction of the square is the fourth color? Answer: \_\_\_\_\_